

NFA to DFA conversion and regular expressions

CSCI 3130 Formal Languages and Automata Theory

Siu On CHAN

Fall 2022

Chinese University of Hong Kong

DFAs and NFAs are equally powerful

NFA can do everything a DFA can do

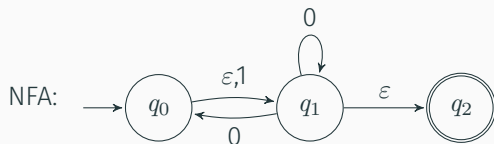
How about the other way?

Every NFA is equivalent to some DFA for the same language

Given an NFA, figure out

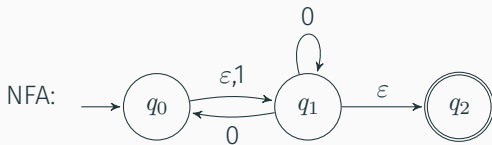
1. the initial active states
2. how the set of active states changes upon reading an input symbol

NFA \rightarrow DFA example

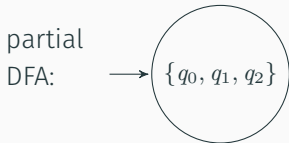


Initial active states (before reading any input)?

NFA \rightarrow DFA example

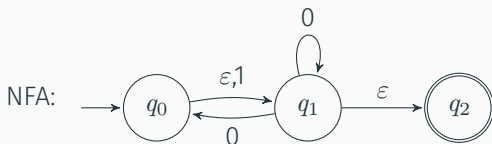


Initial active states (before reading any input)?

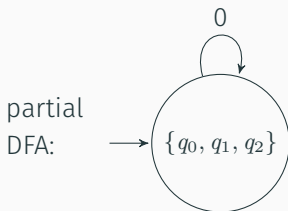


How does the set of active states change?

NFA \rightarrow DFA example



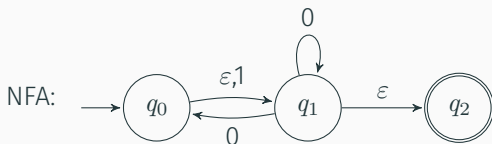
Initial active states (before reading any input)?



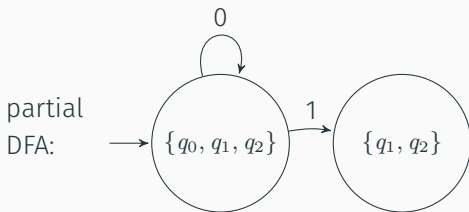
How does the set of active states change?

Current $\{q_0, q_1, q_2\}$ & input 0: New states $\{q_0, q_1, q_2\}$

NFA \rightarrow DFA example



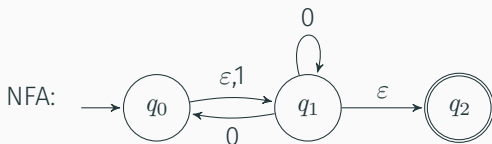
Initial active states (before reading any input)?



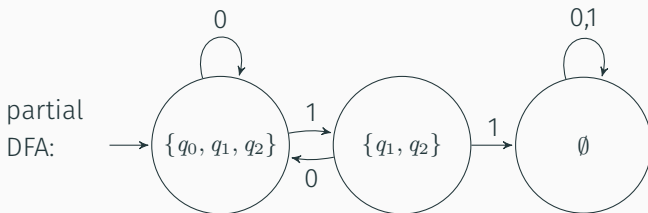
How does the set of active states change?

Current $\{q_0, q_1, q_2\}$ & input 1: New states $\{q_1, q_2\}$

NFA \rightarrow DFA example

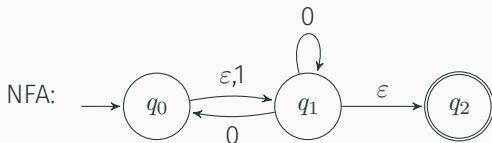


Initial active states (before reading any input)?



How does the set of active states change?

How does the set of active states change?

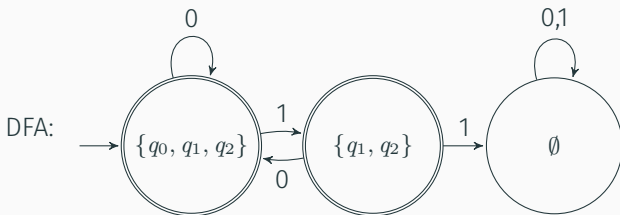
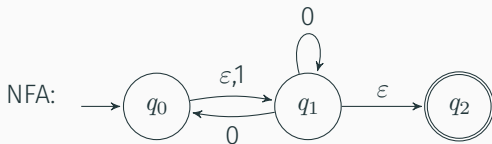


If the NFA is in one of the states in S , upon reading symbol 0 (or 1), what states can the NFA go to

Example: set of active states $S = \{q_1, q_2\}$

- After reading 0, the NFA may go to q_0 , q_1 or q_2
- After reading 1, the NFA may go nowhere

NFA \rightarrow DFA summary



Every DFA state corresponds to a **subset** of NFA states

A DFA state is accepting if it **contains** an accepting NFA state

Regular expressions

Regular expressions

Powerful string matching feature in advanced editors (e.g. Vim, Emacs) and modern programming languages (e.g. PERL, Python)

PERL regex examples:

`colou?r` matches “color”/“colour”

`[A-Za-z]*ing` matches any word ending in “ing”

We will learn to parse complicated regex **recursively**
by building up from simpler ones

Also construct the language matched by the expression **recursively**

Will focus on regular expressions in **formal language theory**
(notations differ from PERL/Python/POSIX regex)

String concatenation

$s = \text{abb}$
 $t = \text{bab}$

$st = \text{abbbab}$
 $ts = \text{bababb}$
 $ss = \text{abbabb}$
 $sst = \text{abbabbbab}$

$$s = x_1 \dots x_n, \quad t = y_1 \dots y_m$$



$$st = x_1 \dots x_n y_1 \dots y_m$$

Operations on languages

- Concatenation of languages L_1 and L_2

$$L_1 L_2 = \{st \mid s \in L_1, t \in L_2\}$$

- n -th power of language L

$$L^n = \{s_1 s_2 \dots s_n \mid s_1, s_2, \dots, s_n \in L\}$$

L^n contains strings that are concatenations of n strings, each from L

- Union of L_1 and L_2

$$L_1 \cup L_2 = \{s \mid s \in L_1 \text{ or } s \in L_2\}$$

Example

$$L_1 = \{0, 01\}$$

$$L_2 = \{\varepsilon, 1, 11, 111, \dots\}$$

$$\begin{aligned} L_1 L_2 &= \{0, 01, 011, 0111, \dots\} \cup \{01, 011, 0111, 01111, \dots\} \\ &= \{0, 01, 011, 0111, \dots\} \end{aligned}$$

0 followed by any number of 1s

$$L_1^2 = \{00, 001, 010, 0101\}$$

$$L_2^2 = L_2$$

$$L_2^n = L_2 \quad \text{for any } n \geq 1$$

$$L_1 \cup L_2 = \{0, 01, \varepsilon, 1, 11, 111, \dots\}$$

Operations on languages

The **star** of L contains strings made up of zero or more chunks from L

$$L^* = L^0 \cup L^1 \cup L^2 \cup \dots$$

Example: $L_1 = \{0, 01\}$ and $L_2 = \{\epsilon, 1, 11, 111, \dots\}$

What is L_1^* ? L_2^* ?

Example

$$L_1 = \{0, 01\}$$

$$L_1^0 = \{\varepsilon\}$$

$$L_1^1 = \{0, 01\}$$

$$L_1^2 = \{00, 001, 010, 0101\}$$

$$L_1^3 = \{000, 0001, 0010, 00101, 0100, 01001, 01010, 010101\}$$

Which of the following are in L_1^* ?

00100001

00110001

10010001

Example

$$L_1 = \{0, 01\}$$

$$L_1^0 = \{\varepsilon\}$$

$$L_1^1 = \{0, 01\}$$

$$L_1^2 = \{00, 001, 010, 0101\}$$

$$L_1^3 = \{000, 0001, 0010, 00101, 0100, 01001, 01010, 010101\}$$

Which of the following are in L_1^* ?

00100001

Yes

00110001

No

10010001

No

Example

$$L_1 = \{0, 01\}$$

$$L_1^0 = \{\varepsilon\}$$

$$L_1^1 = \{0, 01\}$$

$$L_1^2 = \{00, 001, 010, 0101\}$$

$$L_1^3 = \{000, 0001, 0010, 00101, 0100, 01001, 01010, 010101\}$$

Which of the following are in L_1^* ?

00100001

Yes

00110001

No

10010001

No

L_1^* contains all strings such that any 1 is preceded by a 0

Example

$$L_2 = \{\varepsilon, 1, 11, 111, \dots\}$$

any number of 1s

$$L_2^0 = \{\varepsilon\}$$

$$L_2^1 = L_2$$

$$L_2^2 = L_2$$

$$L_2^n = L_2 \quad (n \geq 1)$$

Example

$$L_2 = \{\varepsilon, 1, 11, 111, \dots\}$$

any number of 1s

$$L_2^0 = \{\varepsilon\}$$

$$L_2^1 = L_2$$

$$L_2^2 = L_2$$

$$L_2^n = L_2 \quad (n \geq 1)$$

$$L_2^* = L_2^0 \cup L_2^1 \cup L_2^2 \cup \dots$$

$$= \{\varepsilon\} \cup L_2 \cup L_2 \cup \dots$$

$$= L_2$$

$$L_2^* = L_2$$

Combining languages

We can construct languages by starting with simple ones, like $\{0\}$ and $\{1\}$, and combining them

$$\{0\}(\{0\} \cup \{1\})^* \quad \Rightarrow \quad 0(0 + 1)^*$$

all strings that start with 0

Combining languages

We can construct languages by starting with simple ones, like $\{0\}$ and $\{1\}$, and combining them

$\{0\}(\{0\} \cup \{1\})^*$ \Rightarrow $0(0 + 1)^*$
all strings that start with 0

$(\{0\}\{1\}^*) \cup (\{1\}\{0\}^*)$ \Rightarrow $01^* + 10^*$
0 followed by any number of 1s, or
1 followed by any number of 0s

Combining languages

We can construct languages by starting with simple ones, like $\{0\}$ and $\{1\}$, and combining them

$\{0\}(\{0\} \cup \{1\})^*$ \Rightarrow $0(0 + 1)^*$
all strings that start with 0

$(\{0\}\{1\}^*) \cup (\{1\}\{0\}^*)$ \Rightarrow $01^* + 10^*$
0 followed by any number of 1s, or
1 followed by any number of 0s

$0(0 + 1)^*$ and $01^* + 10^*$ are **regular expressions**

Blueprints for combining simpler languages into complex ones

A language L over Σ is **regular** if it is one of the following

- $L = \emptyset$ or $\{\varepsilon\}$
- $L = \{x\}$ where x is a symbol in Σ
 - If $\Sigma = \{0, 1\}$, then $\{0\}$ and $\{1\}$ are both regular over Σ
- if L_1 and L_2 are both regular, so are $L_1 \cup L_2$, L_1L_2 and L_1^*

Syntax of regular expressions

A **regular expression** over Σ is an expression formed by the following rules

- The symbols \emptyset and ε are regular expressions
- Every symbol in Σ is a regular expression
 - If $\Sigma = \{0, 1\}$, then **0** and **1** are both regular expressions over Σ
- If **R** and **S** are regular expressions, so are **R + S**, **RS** and **R***

Examples:

\emptyset
 $0(0 + 1)^*$
 $01^* + 10^*$

ε
 $1^*(\varepsilon + 0)$
 $(0 + 1)^*01(0 + 1)^*$

A language is **regular** if it is represented by a regular expression

Understanding regular expressions

$$\Sigma = \{0, 1\}$$

01^* = $0(1)^*$ represents $\{0, 01, 011, 0111, \dots\}$

0 followed by any number of 1s

01^* is not $(01)^*$

Understanding regular expressions

$0 + 1$ yields $\{0, 1\}$

strings of length 1

$(0 + 1)^*$ yields $\{\epsilon, 0, 1, 00, 01, 10, 11, \dots\}$

any string

$(0 + 1)^*010$

any string that ends in 010

$(0 + 1)^*01(0 + 1)^*$

any string containing 01

Understanding regular expressions

What language does the following represent?

$$((0 + 1)(0 + 1))^* + ((0 + 1)(0 + 1)(0 + 1))^*$$

Understanding regular expressions

What language does the following represent?

$((0 + 1)(0 + 1))^* + ((0 + 1)(0 + 1)(0 + 1))^*$

$((0 + 1)(0 + 1))^*$

$((0 + 1)(0 + 1)(0 + 1))^*$

Understanding regular expressions

What language does the following represent?

$((0 + 1)(0 + 1))^* + ((0 + 1)(0 + 1)(0 + 1))^*$

$((0 + 1)(0 + 1))^*$

$((0 + 1)(0 + 1)(0 + 1))^*$

$(0 + 1)(0 + 1)$

$(0 + 1)(0 + 1)(0 + 1)$

Understanding regular expressions

What language does the following represent?

$((0 + 1)(0 + 1))^* + ((0 + 1)(0 + 1)(0 + 1))^*$

$((0 + 1)(0 + 1))^*$

$((0 + 1)(0 + 1)(0 + 1))^*$

$(0 + 1)(0 + 1)$
strings of length 2

$(0 + 1)(0 + 1)(0 + 1)$
strings of length 3

Understanding regular expressions

What language does the following represent?

$$((0 + 1)(0 + 1))^* + ((0 + 1)(0 + 1)(0 + 1))^*$$
$$((0 + 1)(0 + 1))^*$$

strings of **even** length

$$((0 + 1)(0 + 1)(0 + 1))^*$$

strings whose length is a
multiple of 3

$$(0 + 1)(0 + 1)$$

strings of length 2

$$(0 + 1)(0 + 1)(0 + 1)$$

strings of length 3

Understanding regular expressions

What language does the following represent?

$$((0 + 1)(0 + 1))^* + ((0 + 1)(0 + 1)(0 + 1))^*$$

strings whose length is **even or a multiple of 3**

= strings of length 0, 2, 3, 4, 6, 8, 9, 10, 12, ...

$$((0 + 1)(0 + 1))^*$$

strings of **even** length

$$((0 + 1)(0 + 1)(0 + 1))^*$$

strings whose length is a
multiple of 3

$$(0 + 1)(0 + 1)$$

strings of length 2

$$(0 + 1)(0 + 1)(0 + 1)$$

strings of length 3

Understanding regular expressions

What language does the following represent?

$$((0 + 1)(0 + 1) + (0 + 1)(0 + 1)(0 + 1))^*$$

Understanding regular expressions

What language does the following represent?

$$((0 + 1)(0 + 1) + (0 + 1)(0 + 1)(0 + 1))^*$$
$$(0 + 1)(0 + 1) + (0 + 1)(0 + 1)(0 + 1)$$

Understanding regular expressions

What language does the following represent?

$((0 + 1)(0 + 1) + (0 + 1)(0 + 1)(0 + 1))^*$

$(0 + 1)(0 + 1) + (0 + 1)(0 + 1)(0 + 1)$

$(0 + 1)(0 + 1)$

$(0 + 1)(0 + 1)(0 + 1)$

Understanding regular expressions

What language does the following represent?

$$((0 + 1)(0 + 1) + (0 + 1)(0 + 1)(0 + 1))^*$$
$$(0 + 1)(0 + 1) + (0 + 1)(0 + 1)(0 + 1)$$

$(0 + 1)(0 + 1)$
strings of length 2

$(0 + 1)(0 + 1)(0 + 1)$
strings of length 3

Understanding regular expressions

What language does the following represent?

$((0 + 1)(0 + 1) + (0 + 1)(0 + 1)(0 + 1))^*$

$(0 + 1)(0 + 1) + (0 + 1)(0 + 1)(0 + 1)$

strings of **length 2 or 3**

$(0 + 1)(0 + 1)$
strings of length 2

$(0 + 1)(0 + 1)(0 + 1)$
strings of length 3

Understanding regular expressions

What language does the following represent?

$$((0 + 1)(0 + 1) + (0 + 1)(0 + 1)(0 + 1))^*$$

strings that can be broken into blocks, where each block has length 2 or 3

$$(0 + 1)(0 + 1) + (0 + 1)(0 + 1)(0 + 1)$$

strings of length 2 or 3

$$(0 + 1)(0 + 1)$$

strings of length 2

$$(0 + 1)(0 + 1)(0 + 1)$$

strings of length 3

Understanding regular expressions

What language does the following represent?

$$((0 + 1)(0 + 1) + (0 + 1)(0 + 1)(0 + 1))^*$$

strings that can be broken into blocks, where each block has length
2 or 3

Which are in the language?

ϵ 1 01 011 00110 011010110

Understanding regular expressions

What language does the following represent?

$$((0 + 1)(0 + 1) + (0 + 1)(0 + 1)(0 + 1))^*$$

strings that can be broken into blocks, where each block has length
2 or 3

Which are in the language?

ϵ	1	01	011	00110	011010110
✓	✗	✓	✓	✓	✓

The regular expression represents all strings except 0 and 1

Understanding regular expressions

What language does the following represent?

$$(1 + 01 + 001)^* (\varepsilon + 0 + 00)$$

Understanding regular expressions

What language does the following represent?

$$(1 + 01 + 001)^* \overbrace{(\epsilon + 0 + 00)}^{\text{ends in at most two 0s}}$$

Understanding regular expressions

What language does the following represent?

$(1 + 01 + 001)^* (\epsilon + 0 + 00)$

ends in at most two 0s

at most two 0s between two consecutive 1s

Never three consecutive 0s

The regular expression represents strings not containing 000

Examples:

ϵ

00

01100101110

0010010

Writing regular expressions

Write a regular expression for all strings with **two consecutive 0s**

Writing regular expressions

Write a regular expression for all strings with **two consecutive 0s**

(anything)00(anything)

$(0 + 1)^*00(0 + 1)^*$